

# TANGY TUESDAY PUZZLE PACK!

*Fun brain puzzles that make you smarter!*

GRADE  
K

New Year  
Math Challenge

Bonus  
Puzzles

# SNAKE

TANGY TUESDAY PUZZLE PACK  
0.1.3

Name: \_\_\_\_\_

tangmath.com © 2017-18 Greg Tang

Fill in each blank box in order, combining the numbers from the previous two boxes.

3			+2			-3	
+2		-3		-2		+1	-1
-1		+3		+4		+1	+2
	-3				-2		3

2	+3		-2		+1		-1	
---	----	--	----	--	----	--	----	--

								-1
--	--	--	--	--	--	--	--	----

	-4		+4		-3	2		
--	----	--	----	--	----	---	--	--

+1								-1
----	--	--	--	--	--	--	--	----

	+2		-3		+1		+3	
--	----	--	----	--	----	--	----	--


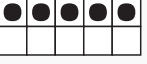
# NUMTANGA


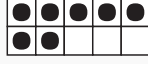
TANGY TUESDAY PUZZLE PACK  
0.1.3



Name: \_\_\_\_\_


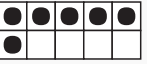
tangmath.com © 2017-18 Greg Tang


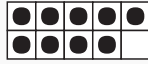
In each empty box, write the matching value between adjacent cards.


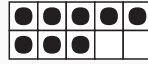
<b>0</b>	
	<b>seven</b>



<b>9</b>	
	<b>eight</b>



<b>4</b>	
	<b>six</b>


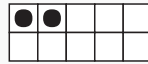
<b>8</b>	
	<b>one</b>

<b>15</b>	
	<b>three</b>

<b>3</b>	
	<b>four</b>

<b>20</b>	
	<b>five</b>

<b>5</b>	
	<b>two</b>

<b>6</b>	
	<b>twenty</b>

# EQUATO

TANGY TUESDAY PUZZLE PACK  
0.1.3

Name: \_\_\_\_\_

tangmath.com © 2017-18 Greg Tang

Fill in the empty boxes to make every horizontal and vertical equation correct.  
Read equations left to right and top to bottom. Use every number in the bank once.

1      2      3      4      5

	-	4	=	
-		-		=
	+		=	5
=		=		-
3	+	1	=	

# WORD SEARCH

TANGY TUESDAY PUZZLE PACK  
0.1.3

Name: \_\_\_\_\_

tangmath.com © 2017-18 Greg Tang

Spell your answers, then search for them below.  
Hidden words are spelled left to right and top to bottom.

nine tall five less six two four three

2 + 2

\_\_\_\_\_

1, 2, \_\_\_\_, 4, 5

\_\_\_\_\_

3 is \_\_\_\_ than 4

\_\_\_\_\_

1 less than 3

\_\_\_\_\_

5

\_\_\_\_\_

one plus \_\_\_\_ makes ten

\_\_\_\_\_

the opposite of short

\_\_\_\_\_

a hexagon has \_\_\_\_ sides

\_\_\_\_\_



# MAZE

TANGY TUESDAY PUZZLE PACK  
0.1.3

Name: \_\_\_\_\_

tangmath.com © 2017-18 Greg Tang

Find a path through the maze from top to bottom.  
Draw a circle around the number 2.

• • •	• • •	two	•	• • •
4	•	• •	4	1
five	•	2	two	2
• • • •	3	three	• • • • •	• •
• • •	four	four	• • •	two
three	four	3	five	2